

5501-02 Scalene triangles

Free resources from Mathsblog in association with www.mathsgogogo.co.uk © Mathsgogogo

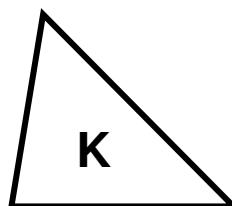
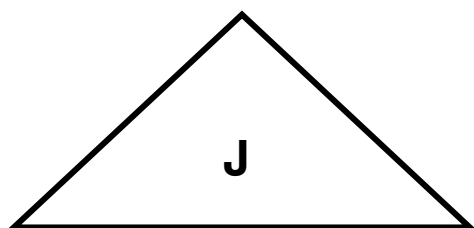
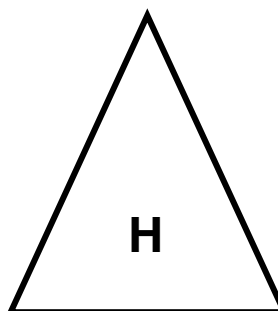
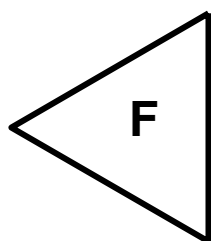
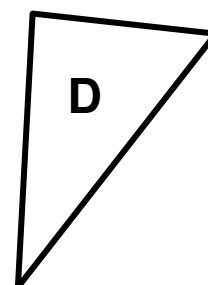
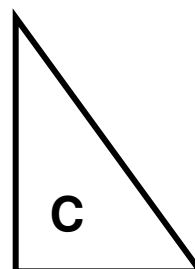
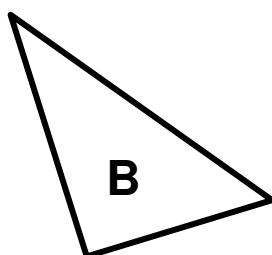
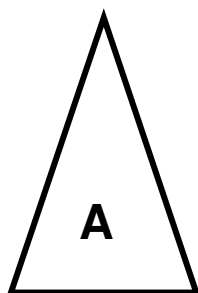
A **scalene** triangle is one which has no sides the same length and no equal angles.

How do you know that, Subby?

I'm a genius!



Which of these triangles are **scalene** triangles? You may need to measure some of the sides.



5501-02 Scalene triangles Answers

Free resources from Mathsblog in association with www.mathsgogogo.co.uk © Mathsgogogo

B, C, D, E, G and K