


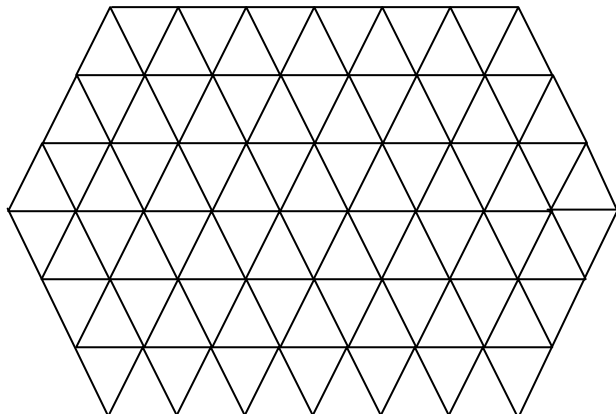
KS2 Maths SAT questions: Shape (2)

Maths worksheets from mathsblog.co.uk

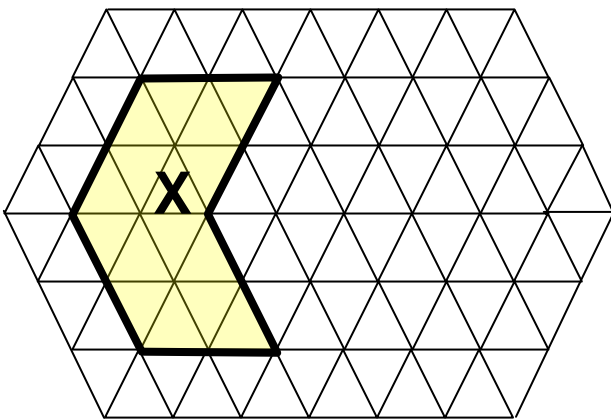
1) Draw a regular hexagon on this grid.



Draw an equilateral triangle on this grid.



2) On the grid draw another shape that has the **same area** as shape **X**.



Say which statements are true about shape **X**.

Write **true** or **false** in the boxes

a) Shape **X** has an area of 16 triangles.

b) Shape **X** has one line of symmetry.

c) Shape **X** is a hexagon.

d) Shape **X** has six vertices.

KS2 Maths SAT questions: Shape (2)

Maths worksheets from mathsblog.co.uk

Answers

Page 1

1. Any sized regular hexagon. Any sized equilateral triangle

2. Any shape with area of 16 triangles.

All the statements are **true**.